

Name _____ Date _____

Tens and Ones

INBT.2

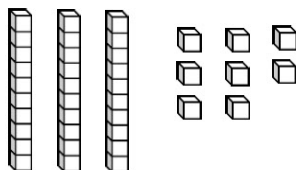
Write the tens and ones.

Standard Form

Draw It

Expanded form

38



30 + 8

42

+

35

+

26

+

37

+

Name _____ Date _____

Making Teen Numbers

INBT.2

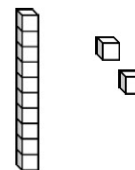

Write the tens and ones.

Standard Form


Ten Frames

Draw It


12




13



15



14



16

