

Name: _____

5-A-DAY MATH

Week 1

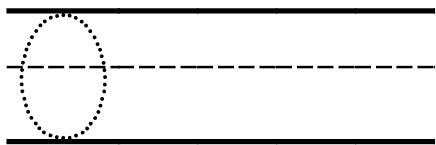
Date _____

Day 1

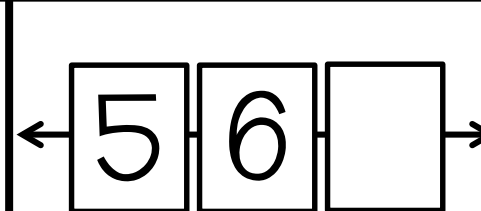

QUICK CHECK




1+0= 2+0=
0+2= 0+1=

Trace and write the number 2 times.



How many? 1 ○
 2 ○
 3 ○

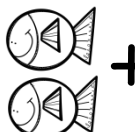
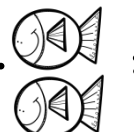



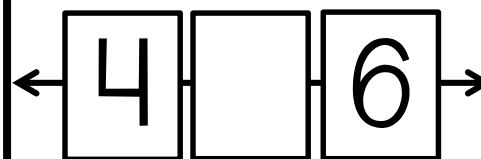
 +  =
_____ 

Day 2

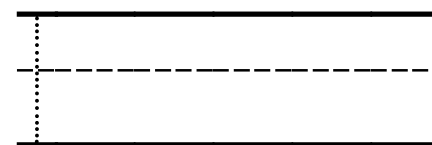
QUICK CHECK

3+0= 4+0=
0+4= 0+3=


 +  =
_____ 



Trace and write the number 2 times.



How many? 2 ○
 3 ○
 4 ○




Day 3

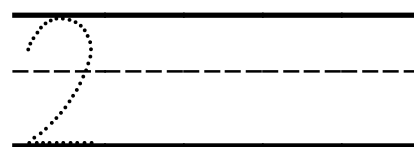
QUICK CHECK




5+0= 6+0=
0+6= 5+0=

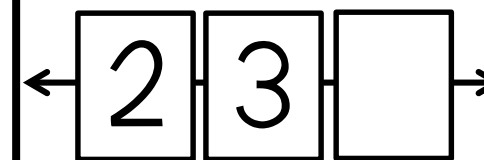
How many? 3 ○
 4 ○
 5 ○



Trace and write the number 2 times.






 +  =
_____ 



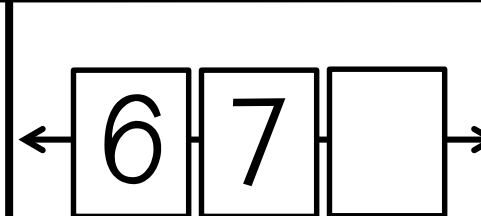

Day 4

QUICK CHECK

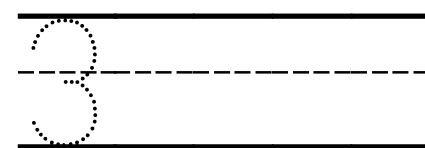
7+0= 8+0=
0+8= 0+7=

 +  =
_____ 

How many? 1 ○
 2 ○
 3 ○




Trace and write the number 2 times.






Day 5

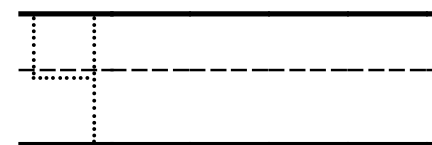
QUICK CHECK

9+0= 0+0=
0+0= 9+0=



 +  =
_____ 

Trace and write the number 2 times.



How many? 2 ○
 4 ○
 6 ○



Name: _____

5-A-DAY MATH

Week 2

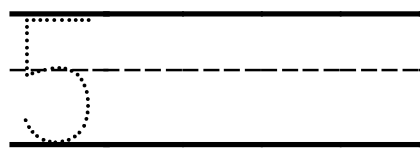
Date _____

Day 1

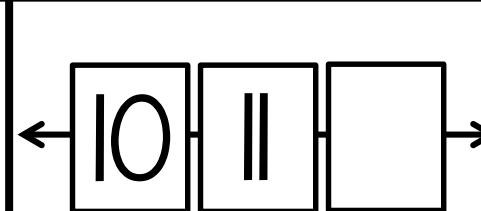
QUICK CHECK

1+0= 1+2=
2+1= 0+1=

Trace and write the number 2 times.



How many? 4 ○
 5 ○
 6 ○



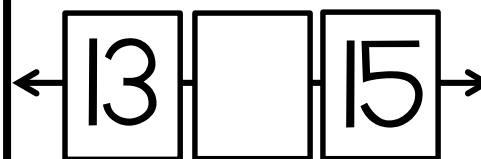
+ =

Day 2

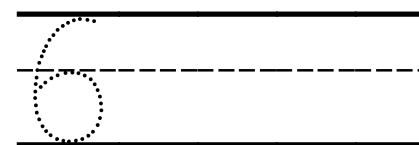
QUICK CHECK

1+3= 1+4=
4+1= 3+1=

+ =



Trace and write the number 2 times.



How many? 2 ○
 3 ○
 4 ○

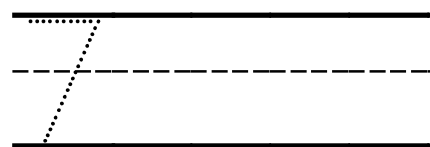
Day 3

QUICK CHECK


1+5= 1+6=
6+1= 5+1=

How many? 8 ○
 9 ○
 10 ○

Trace and write the number 2 times.



+ =



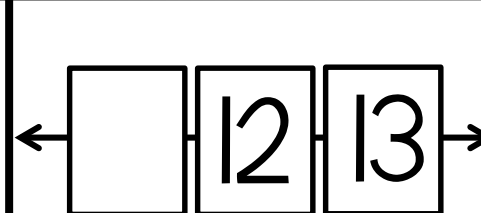
Day 4

QUICK CHECK

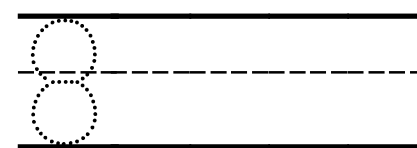
1+7= 1+8=
8+1= 7+1=

+ =

How many? 3 ○
 4 ○
 5 ○



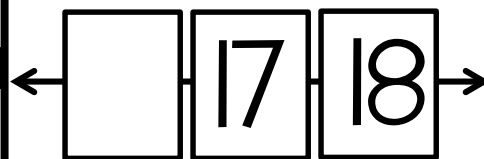
Trace and write the number 2 times.



Day 5

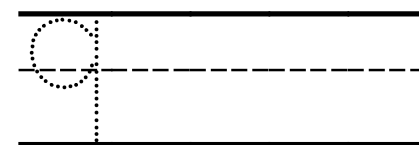
QUICK CHECK

1+0= 0+0=
0+5= 7+0=



+ =

Trace and write the number 2 times.



How many? 2 ○
 4 ○
 6 ○

Name: _____

5-A-DAY MATH

Week 3*

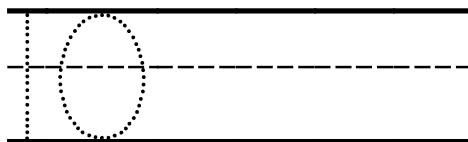
Date _____

Day 1


QUICK CHECK

$0+0=$ $2+1=$
 $1+1=$ $1+0=$

Trace and write the number 2 times.

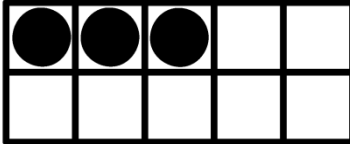


How many? _____

 6 ○
7 ○
8 ○

← [] [20] [21] →

How many? _____

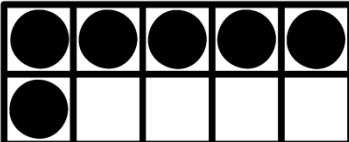


Day 2

QUICK CHECK

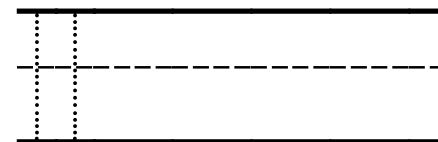
$0+4=$ $1+4=$
 $1+3=$ $0+6=$

How many? _____

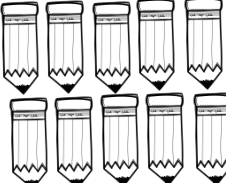


← [6] [] [8] →

Trace and write the number 2 times.



How many? _____


 6 ○
8 ○
10 ○

Day 3

QUICK CHECK

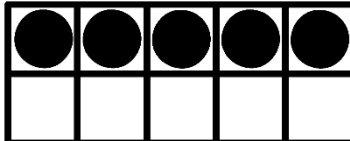
$0+8=$ $1+6=$
 $1+5=$ $0+9=$

How many? _____

 3 ○
6 ○
9 ○

Trace and write the number 2 times.

How many? _____



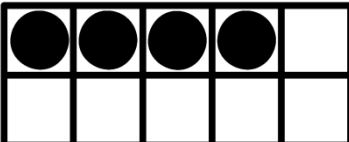
← [] [17] [18] →

Day 4

QUICK CHECK

$2+0=$ $8+1=$
 $9+1=$ $3+0=$

How many? _____



How many? _____

 3 ○
4 ○
5 ○

← [18] [19] [] →

Trace and write the number 2 times.


Day 5

QUICK CHECK

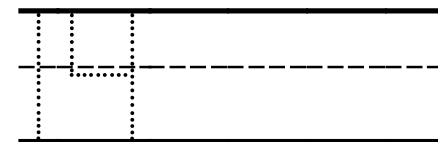
$4+0=$ $6+1=$
 $7+1=$ $5+0=$

← [] [11] [12] →

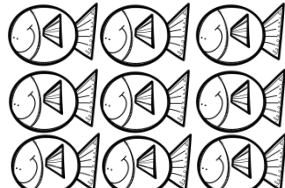
How many? _____



Trace and write the number 2 times.



How many? _____

 7 ○
8 ○
9 ○