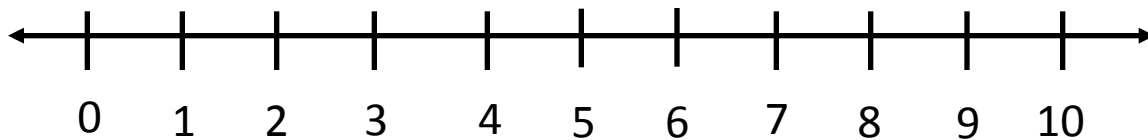


Name _____ Date _____

Peaches



Pam went to her grandma's house to pick peaches. She picked 5 peaches off of one tree and 4 peaches off of the next tree.

How many peaches did she pick in all?

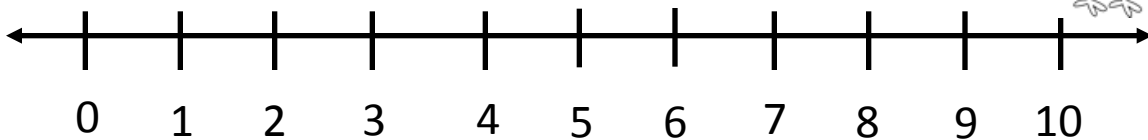

Drawing

Ten Frame				

Equation	Sum
$\underline{\quad} + \underline{\quad} = \underline{\quad}$	

Name _____ Date _____

Chicks



Pat was walking down the road and saw some chicks with their mom. At first, she saw 4 chicks.

Then, she saw 3 more chicks.

How many chicks did she see altogether?

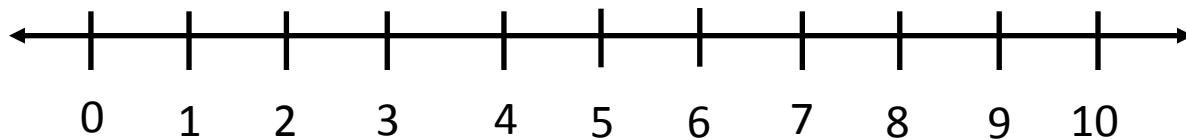
Drawing

Ten Frame				

Equation	Sum
$\underline{\quad} + \underline{\quad} = \underline{\quad}$	

Name _____ Date _____

Ice Cream



Rob went to the ice cream shop. He got 2 scoops of vanilla ice cream and 2 scoops of chocolate ice cream. How many scoops of ice cream did he get in all?

Drawing

Ten Frame				

Equation	Sum
$\underline{\quad} + \underline{\quad} = \underline{\quad}$	